
















Time: 10 Minutes	Paper Math 2	Total Marks: 10
------------------	--------------	-----------------

6th Month, 4th Week, 3rd Day	Syllabus: 3-D Shapes + Exercise # 5
------------------------------	-------------------------------------

Q. Write the name of each 3-D shape and match with the same shaped object. (10)

3-D اشکال کے نام لکھیں اور ان کو درست شکل سے ملائیں۔














	•	•		
	•	•		
	•	•		
	•	•		
	•	•		

Time: 10 Minutes	Paper Math 2	Total Marks: 10
------------------	--------------	-----------------

6th Month, 4th Week, 3rd Day	Syllabus: 3-D Shapes + Exercise # 5
------------------------------	-------------------------------------

Q. Write the name of each 3-D shape and match with the same shaped object. (10)

3-D اشکال کے نام لکھیں اور ان کو درست شکل سے ملائیں۔

	•	•		
	•	•		
	•	•		
	•	•		
	•	•	